

Lineare Funktionen

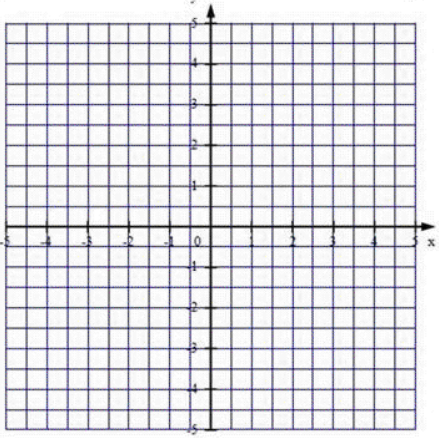
Ermittle die Funktionsgleichung

$$y = mx + n$$

bearbeitet von

.....

Gegeben: (|) (|)

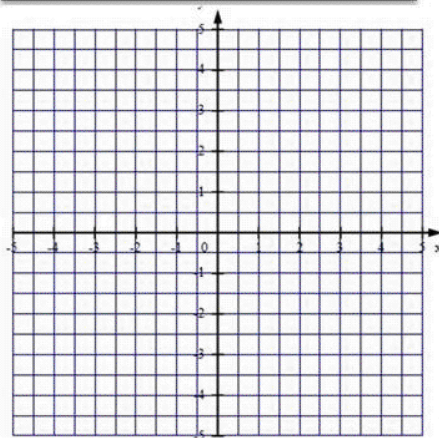


m =	n =
y =	

-6-

-5-

Gegeben: (|) (|)



m =	n =
y =	

-7-

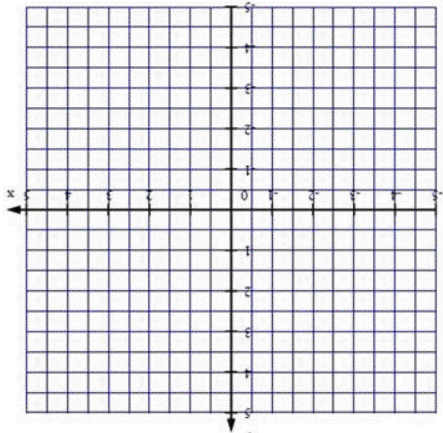
-4-

www.minibooks.ch

-3-

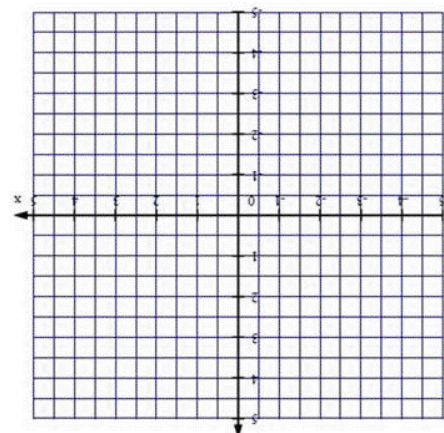
-2-

y =	
n =	m =



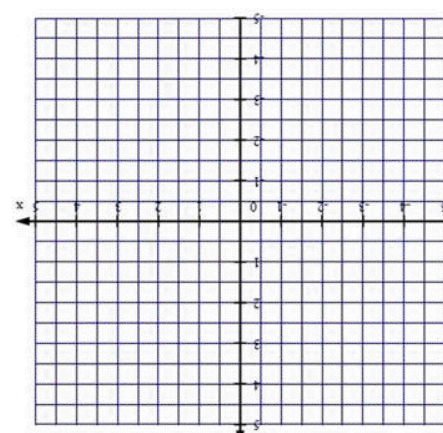
Gegeben: (|) (|)

y =	
n =	m =



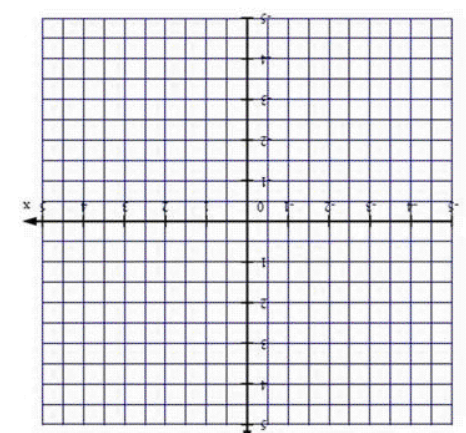
Gegeben: (|) (|)

y =	
n =	m =



Gegeben: (|) (|)

y =	
n =	m =



Gegeben: (|) (|)